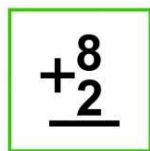




FICHA

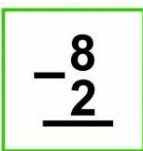
5



SUMAS



Y



RESTAS




CON



Y



SIN



LLEVADAS

Nombre

Sumas 1

$$\begin{array}{r} 426 \\ + 249 \\ \hline \end{array}$$

$$\begin{array}{r} 532 \\ + 365 \\ \hline \end{array}$$

$$\begin{array}{r} 682 \\ + 632 \\ \hline \end{array}$$

Sumas 2

$$\begin{array}{r} 269 \\ + 259 \\ \hline \end{array}$$

$$\begin{array}{r} 962 \\ + 59 \\ \hline \end{array}$$

$$\begin{array}{r} 354 \\ + 365 \\ \hline \end{array}$$

Sumas 3

$$\begin{array}{r} 753 \\ + 268 \\ \hline \end{array}$$

$$\begin{array}{r} 951 \\ + 42 \\ \hline \end{array}$$

$$\begin{array}{r} 159 \\ + 264 \\ \hline \end{array}$$

Sumas 4

$$\begin{array}{r} 426 \\ + 456 \\ \hline \end{array}$$

$$\begin{array}{r} 684 \\ + 846 \\ \hline \end{array}$$

$$\begin{array}{r} 654 \\ + 624 \\ \hline \end{array}$$

Restas 1

$$\begin{array}{r} 874 \\ - 339 \\ \hline \end{array}$$

$$\begin{array}{r} 896 \\ - 226 \\ \hline \end{array}$$

$$\begin{array}{r} 654 \\ - 283 \\ \hline \end{array}$$

Restas 2

$$\begin{array}{r} 789 \\ - 429 \\ \hline \end{array}$$

$$\begin{array}{r} 987 \\ - 266 \\ \hline \end{array}$$

$$\begin{array}{r} 465 \\ - 349 \\ \hline \end{array}$$

Restas 3

$$\begin{array}{r} 486 \\ - 93 \\ \hline \end{array}$$

$$\begin{array}{r} 957 \\ - 386 \\ \hline \end{array}$$


$$\begin{array}{r} 579 \\ - 275 \\ \hline \end{array}$$

Restas 4

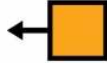
$$\begin{array}{r} 495 \\ - 338 \\ \hline \end{array}$$

$$\begin{array}{r} 698 \\ - 246 \\ \hline \end{array}$$

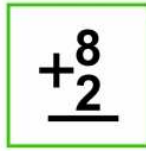
$$\begin{array}{r} 985 \\ - 654 \\ \hline \end{array}$$



PROBLEMAS



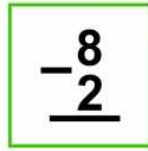
DE



SUMAS



Y



RESTAS



CON



Y




SIN



LLEVADAS



En



en



pueblo



hay



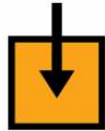
426



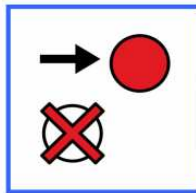
farolas




y




en



otro




365.



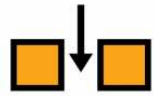
¿Cuántas



farolas



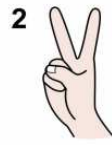
hay




entre



los



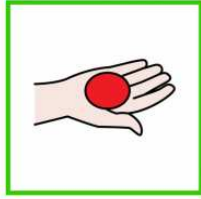
dos?



2)




Marcelino



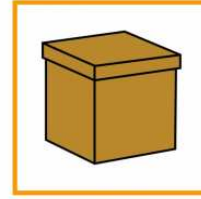
tiene



en



una



caja




348


348



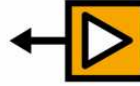
chapas



El



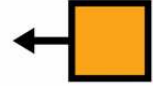
día



del



cumpleaños




de



su




hermana



le




regala

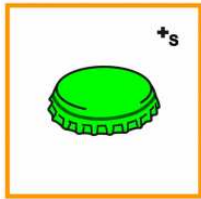


259

259.



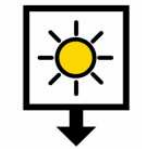
¿Cuántas



chapas



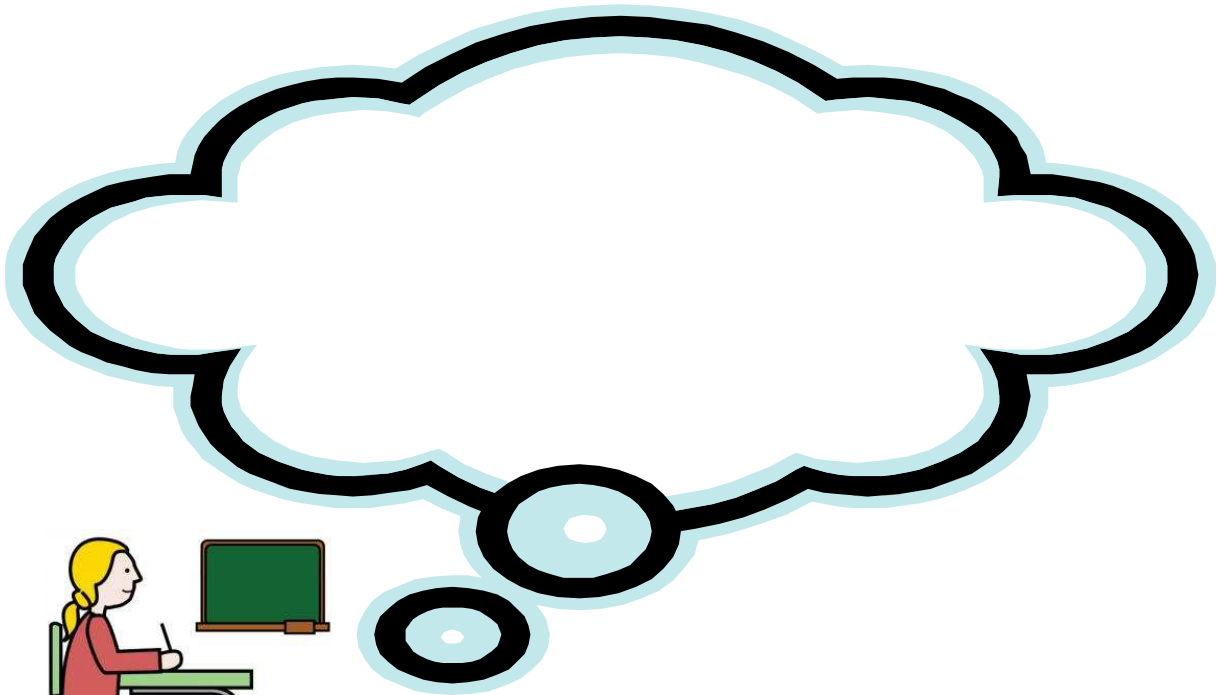
tiene



ahora




Marcelino?



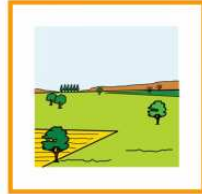
3)




En



un




campo



hay




285



árboles



Si



el



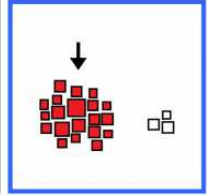
agricultor




planta




285



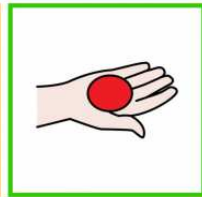
más,



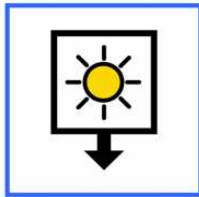
¿Cuántos




árboles



tendrá



ahora?



4)



María




ha



ido a comprar



y




se



ha



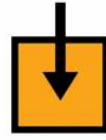
gastado




139



euros



en



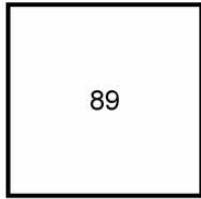
un



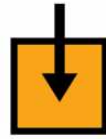
televisor




y



89




en



un



mp3.



¿Cuánto



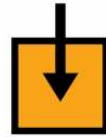
dinero



ha



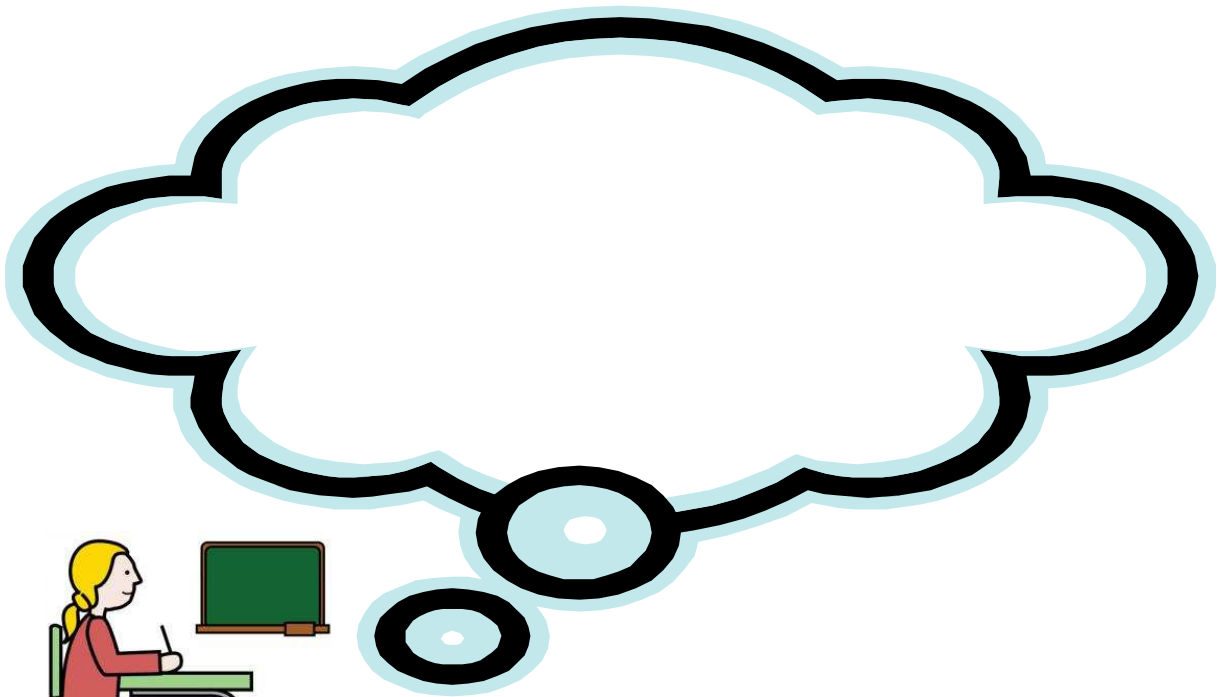
gastado



en



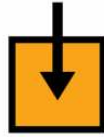
total?




5)



Si




en



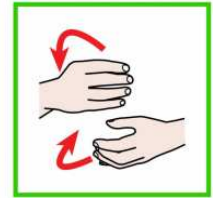
una




fábrica




se



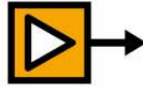
hacen




450



coches




al



día



y



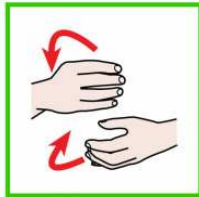
un



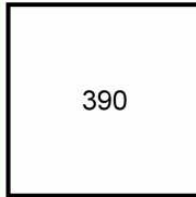
día




sólo




hacen



390,



¿cuántos




coches



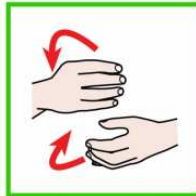
han



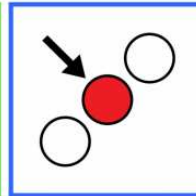
faltado




por



hacer



ese



día?

