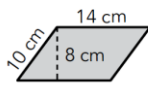


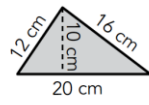
Nombre y apellidos:

1 Halla las áreas y los perímetros de estas figuras:

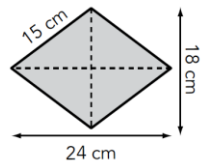
a)



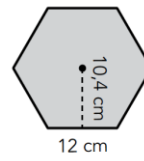
b)



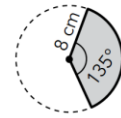
c)



d)

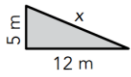


e)

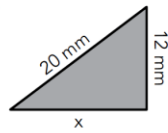


2 Halla el valor de x para cada una de las siguientes figuras:

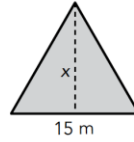
a)



b)



c)



d)

